



INDIAN SCHOOL AL WADI AL KABIR
PRE MIDTERM ASSESSMENT REVISION PAPER
2024 – 2025

NAME:

DATE:

CLASS:IV SEC: __ ROLL NO: ____

SUBJECT: EVS

Teacher's Sign:

General Instructions:

- This paper consists of 3 sections and 4 pages.
- All questions are compulsory.

SECTION-A

I. Read the following questions and circle the correct option.

1. Which of the following answer is true about our senses and our sense organs?
 - a. You use your ears to hear.
 - b. You use your eyes to smell.
 - c. You use your hair to touch.
 - d. You use your nose to taste.
2. A child of 3 years will have a set of _____teeth.
 - a. 12
 - b. 32
 - c. 28
 - d.20
3. Which senses are used in the following sentence?
"I went outside and felt the cool breeze on my skin and smelled my neighbour baking a cake."
 - a. touch and sight
 - b. hearing and taste
 - c. touch and smell
 - d. taste and hearing
4. The portion of the tooth seen above the gum is called the _____.
 - a. enamel
 - b. dentine
 - c. pulp
 - d. crown
5. Very dim or bright light will strain our _____.
 - a. ears
 - b. nose
 - c. eyes
 - d. skin
6. Which of the following carry messages from the sense organs to the brain?
 - a. bones
 - b. muscles
 - c. nerves
 - d. teeth
7. Rama is 13 years old. Which type of teeth does she have?
 - a. milk teeth
 - b. temporary teeth
 - c. wisdom teeth
 - d. permanent teeth.
8. _____ are the pair of molars that grow later in adult life.
 - a. milk teeth
 - b. wisdom teeth
 - c. temporary teeth
 - d. permanent teeth

II. Match the following.

Column A		Column B	
1.	loud sounds	a.	thin sticky layer of germs on teeth
2.	plaque	b.	ear drum
3.	garbage	c.	nose
4.	tartar	d.	yellowish hard deposits on teeth
1. _____		2. _____	
3. _____		4. _____	

III. State whether the following statements are True or False.

1. In a tooth, blood vessels and nerves are present in the enamel. _____
2. The tongue helps us to speak and taste. _____

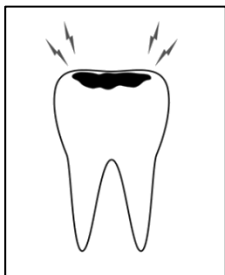
SECTION-B

IV. Give reasons for the following statements.

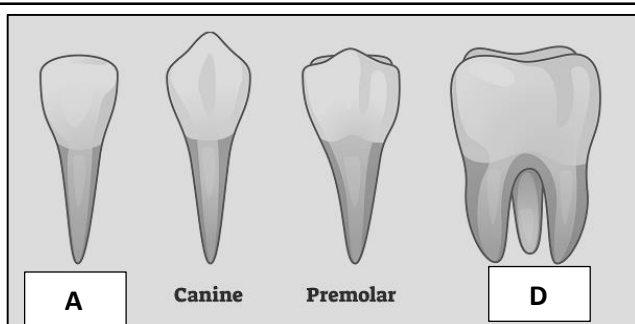
1. We should not insert any pointed object into our ears.

2. Canines are called tearing teeth.

V. Observe the given pictures and answer the questions that follow.



1. The given pictures shows tooth decay.
- a. The tooth's enamel has been damaged causing _____.
- b. Write one more effect of tooth decay. _____.



2. The picture shows four different types of teeth. Label the picture A and D.

A _____

D _____

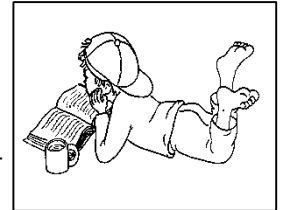
3. When Riya had her lunch, some food items got stuck in between her teeth.

a. She used a type of string called _____
to clean the teeth.

b. Flossing removes the food that cannot be removed by

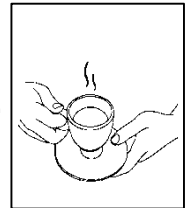


4. Sam enjoys reading books in the manner shown in the picture.
Is this the proper way to read a book? Why?



5. Ram was about to drink the tea but he sensed that it was very hot.

a. Name the sense organ which enabled him to understand that the tea was hot.



b. Drinking very hot tea can damage your _____ on the tongue.

SECTION-C

VI. Answer the following questions.

1. How many types of taste buds does our tongue have?

2. Write two ways in which you can take care of your nose.

3. How do our sense organs help us stay safe in our environment?

4. Differentiate between the following:

a. plaque	b. tartar